

Name _____

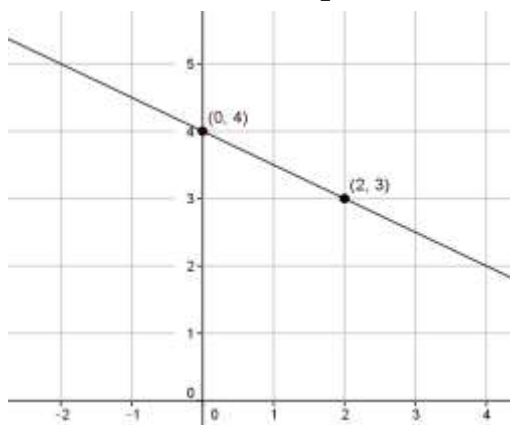
Date _____

Lesson 18: There is Only One Line Passing Through a Given Point with a Given Slope

Exit Ticket

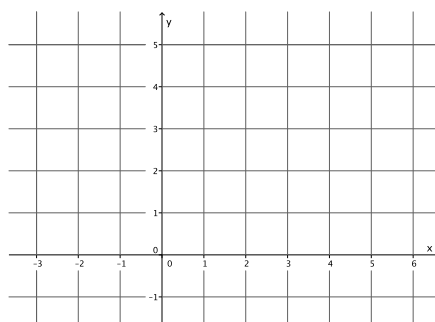
Mrs. Hodson said that the graphs of the equations below are incorrect. Find the student's errors and correctly graph the equations.

1. Student graph of $y = \frac{1}{2}x + 4$.

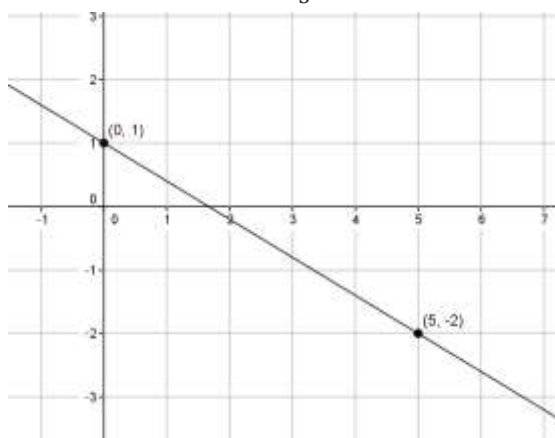


Error:

Correct graph of equation:



Student graph of $y = -\frac{3}{5}x - 1$.



Error:

Correct graph of equation:

